



# QUADRILATERALS

START HERE



How many sides does the shape have?



## Quadrilateral

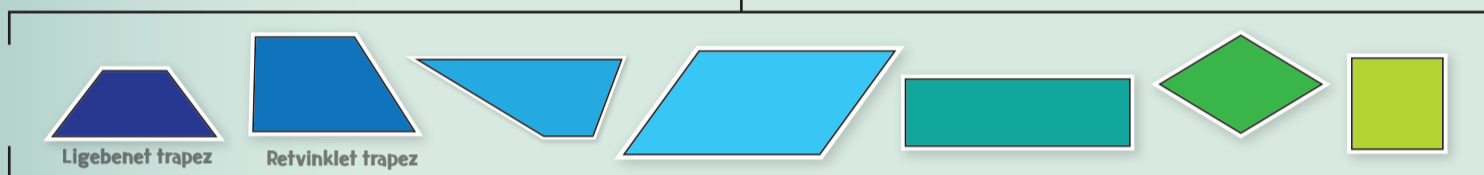


Does the shape have parallel sides?




Two straight lines are parallel, if they are equidistant - always the same distance apart

## Trapez



Does the shape have two pairs of parallel sides?




Opposite sides in the quadrilateral have to be parallel

## Parallelogram

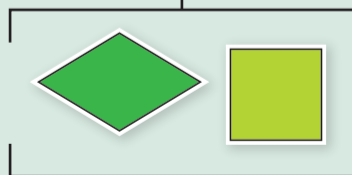


No to both questions

Are all sides in the figure of equal length?




## Rhombus




Does the shape have right angles




Does the shape have right angles



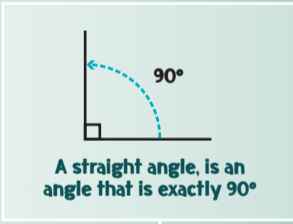
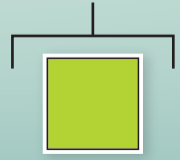
## Rectangle



Are all sides in the figure of equal length?



## Square



A straight angle, is an angle that is exactly 90°